




Grade 1 Intervals




Question 1

Above each note write another note to form the named harmonic interval, the key is F major.

*3rd**4th**8th/8ve**7th**6th**5th*

Question 2

Give the number (e.g. 2nd, 3rd, 4th) of each of these melodic intervals. The key is C major.



Question 3

After each note write a higher note to form the named melodic interval. The key is D major.

<p>4th</p>	<p>2nd</p>	<p>8th/8ve</p>
<p>7th</p>	<p>5th</p>	<p>3rd</p>

Now check your answers with the MTO website.