



Grade 1. Tonic triads

Question 1


Name the keys of each of these tonic triads.




.....




.....




.....



.....




.....



.....

Question 2

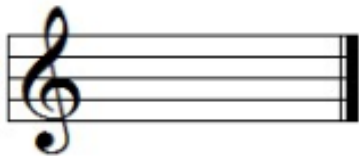
Write the tonic triads named below, using the correct key signature for each.




G major



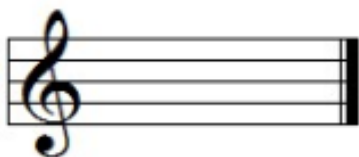
F major



C major



D major



F major



G major

