






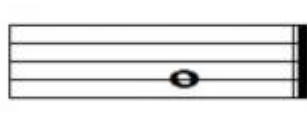



Grade 1. Treble and bass clefs

Question 1

Add the correct clef to make each of these named notes, as shown in the first answer.

		
<i>C</i>	<i>D</i>	<i>Bb</i>
		
<i>F#</i>	<i>A</i>	<i>F</i>
		
<i>C#</i>	<i>G</i>	<i>E</i>

Now check your answers with the MTO website.