


Grade 4. Intervals


Question 1

Name this harmonic interval.



Question 2

Name this harmonic interval.



Question 3

Name this harmonic interval.




Question 4

Name this harmonic interval.




Question 5

Name this harmonic interval.



Question 6

Name this harmonic interval.



Now check your answers with the MTO website.