



Grade 3. Tonic triads

Question 1


Write the tonic triad in each of the following keys. Do not use key signatures, but remember to add any necessary sharp or flat signs.




Bb major



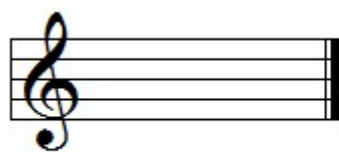
D minor




F# minor



G major




C minor




F minor

Question 2


Write the tonic triad in each of the following keys. Do not use key signatures, but remember to add any necessary sharp or flat signs.




E minor




E major




A minor



D major




B minor



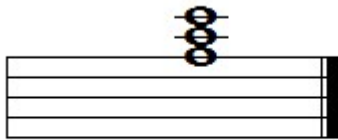
F major

Question 3

Add the correct clef and any necessary sharp or flat signs to each of these tonic triads. Do not use key signatures.




C minor




A major



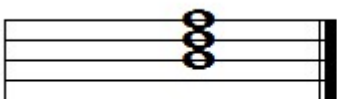
E minor



F major




G minor




Bb major

Question 4


Write the key signature and tonic triad of each of these keys.




E major




F# minor




Bb major



G minor



C# minor



Eb major

Now check your answers with the MTO website.